

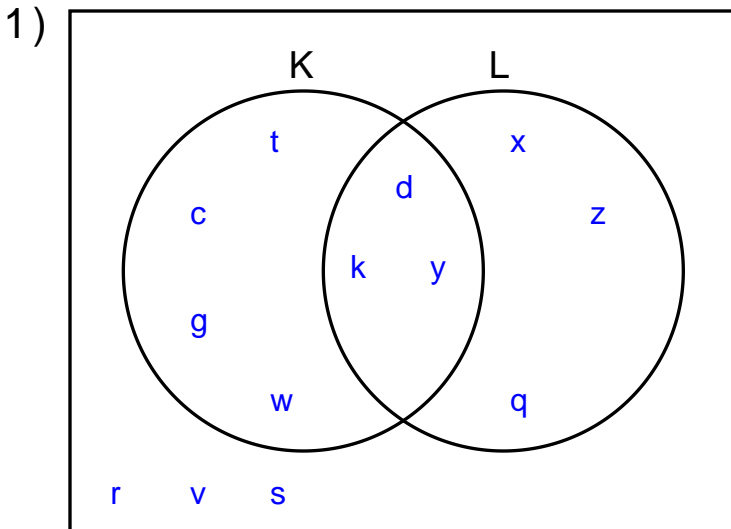
Name : _____

Score : _____

Teacher : _____

Date : _____

Solve the Problems Using the Venn Diagrams

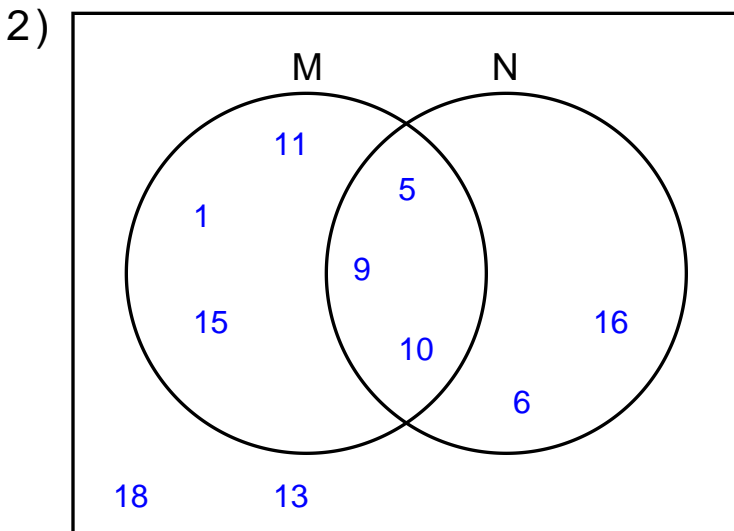


$(K \cup L)'$ = _____

L' = _____

K' = _____

K = _____

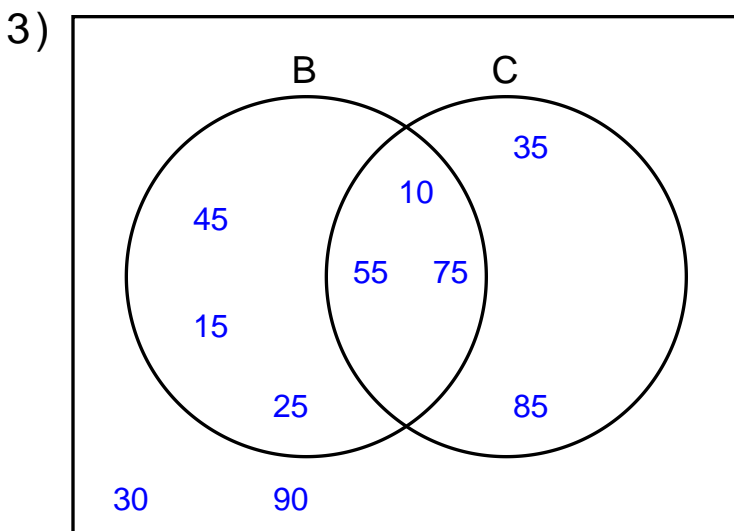


$M' \cup N$ = _____

$M \cap N$ = _____

$N - M'$ = _____

$M \cap N'$ = _____



$(B - C)'$ = _____

$C' - B$ = _____

$C - B'$ = _____

$B' \cap C'$ = _____

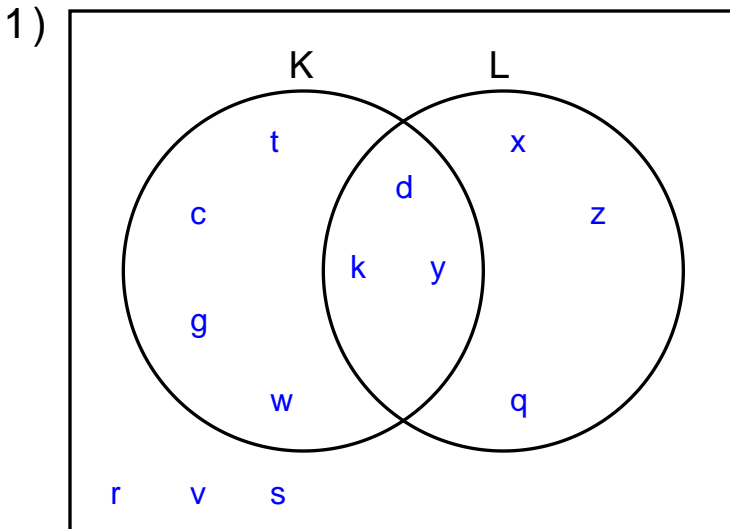
Name : _____

Score : _____

Teacher : _____

Date : _____

Solve the Problems Using the Venn Diagrams

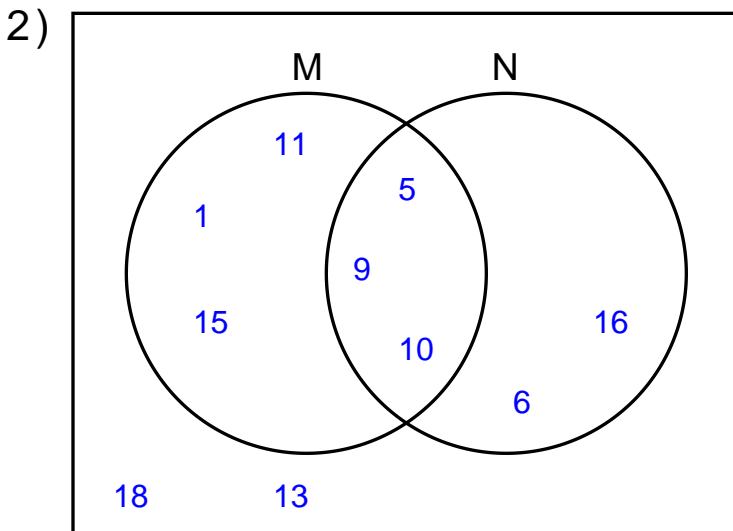


$$(K \cup L)' = \{r, v, s\}$$

$$L' = \{t, c, g, w, r, v, s\}$$

$$K' = \{x, z, q, r, v, s\}$$

$$K = \{t, c, g, w, d, k, y\}$$

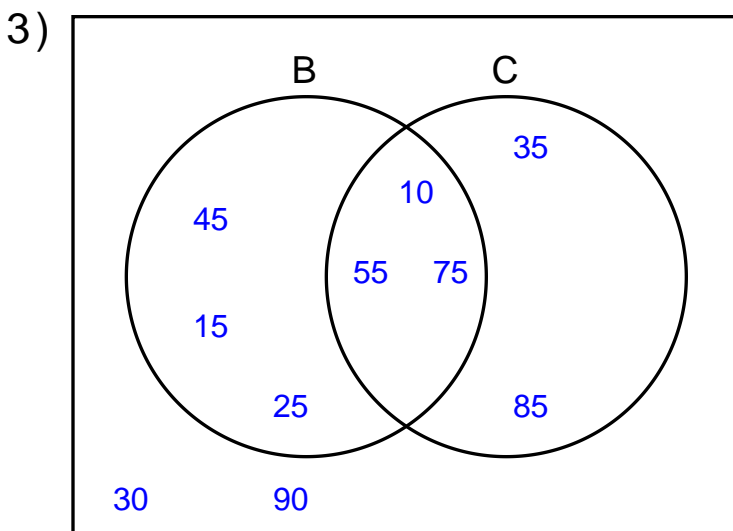


$$M' \cup N = \{16, 6, 5, 9, 10, 18, 13\}$$

$$M \cap N = \{5, 9, 10\}$$

$$N - M' = \{5, 9, 10\}$$

$$M \cap N' = \{11, 1, 15\}$$



$$(B - C)' = \{35, 85, 10, 55, 75, 30, 90\}$$

$$C' - B = \{30, 90\}$$

$$C - B' = \{10, 55, 75\}$$

$$B' \cap C' = \{30, 90\}$$